



# ADMISSION CUM SCHOLARSHIP TEST SAMPLE TEST PAPER

(For Students Going to Class 11<sup>TH</sup> IN 2022)

**STREAM : MEDICAL | COURSE OFFERED : MEDICAL GROUND ZERO**

Time : 2 hours

Maximum Marks: 240

### INSTRUCTIONS

DO NOT BREAK THE SEALS ON THIS BOOKLET, AWAIT INSTRUCTIONS FROM THE INVIGILATOR.

**(A) General :**

1. This Question paper contains **FOUR** Parts (Physics, Chemistry, Biology & Mental Ability) containing 60 questions in all.
2. This Question Paper contains 12 pages, other than the OMR.
3. This Question Paper contains total **60 questions, 15 questions each** in **Physics, Chemistry, Biology & Mental Ability**.
4. The Question Paper has blank spaces at the bottom of each page for rough work.No additional sheets will be provided for rough work.
5. Blank papers, clip boards, log tables, slide rule, calculators, cellular phones, pagers and electronic gadgets, in any form, are **NOT** allowed.
6. This booklet also contains the **OMR** answer sheet (i.e., A machine gradable Response Sheet).

**(B) Answering on the OMR:**

7. Each question will have **4 choices** in both the Sections, out of which **only one choice is correct**.
8. Fill the bubble with **Ball Pen (Blue or Black) ONLY**.

**(C) Filling – Name and Registration No.**

9. On the **OMR sheet**, write your Name and Registration No. using ball pen. Also, put your signature in the appropriate box using ball pen.

**(D) Marking Scheme:**

9. (a) For each question, you will be awarded **4 marks** if you have darkened only one bubble corresponding to the right answer.  
 (b) In case you have not darkened any bubble, you will be awarded 0 mark for that question.  
 (c) In all other cases, you will be awarded **-1 mark**.

**SEAL**

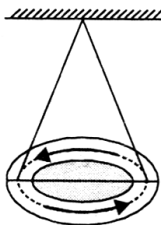
Name : .....

Registration No.:





13. A circular loop is suspended in air as shown in figure. When the loop is seen from above, current flows anti-clockwise and when seen from below, current flows clockwise. This loop behaves as a magnet. The N-pole of this magnet is on



- (A) the upper face (B) lower face  
(C) the lower face if current is large (D) upper face if current is large
14. SI unit of resistivity is  
(A) ohm-meter (B) ohm-meter<sup>2</sup> (C) ohm<sup>-1</sup> (D) ohm-meter<sup>-1</sup>
15. Which of the following is a better nuclear fuel?  
(A) Thorium - 236 (B) Uranium - 235  
(C) Neptunium - 239 (D) Plutonium - 239

## PART-B : CHEMISTRY

16.  $10^{-6}$  M HCl is diluted to 100 times. Its pH is  
(A) 6.0 (B) 8.0 (C) 6.95 (D) 9.5
17. Iron filings were added to solution of copper sulphate. After 10 minutes, it was observed that the blue colour of the solution changed and layer got deposited on iron filings. The colour of the solution and that of the layer would respectively be  
(A) Yellow and green (B) Brown and blue  
(C) Red and greenish blue (D) Green and reddish brown

Space for rough work

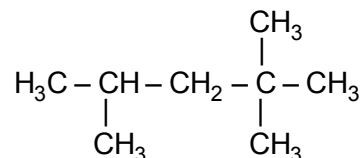
18. Write the net ionic equation for the reaction of sodium hydroxide with hydrochloric acid.

- (A)  $\text{Na}^+ + \text{Cl}^- \rightarrow \text{NaCl}$  (B)  $\text{Na}^+ + \text{Cl}^- + \text{H}^+ + \text{OH}^- \rightarrow \text{NaCl} + \text{H}_2\text{O}_{(l)}$   
 (C)  $\text{H}^+ + \text{OH}^- \rightarrow \text{H}_2\text{O}_{(l)}$  (D) None of these

19. The hydrophilic part of a synthetic detergent is

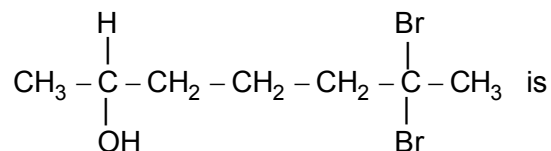
- (A)  $\text{CH}_3(\text{CH}_2)_{10}\text{-CH}_2\text{-}$  (B)  $\text{-CO}^-\text{Na}^+$   
 (C)  $\text{-SO}_3^-\text{Na}^+$  (D)  $\text{-COO}^-\text{Na}^+$

20. In the given structure, the type of carbon atoms present are



- (A) One primary, two secondary and one tertiary  
 (B) Four primary, one secondary and two tertiary  
 (C) One primary, one secondary, one tertiary and one quaternary  
 (D) Five primary, one secondary, one tertiary and one quaternary

21. The IUPAC name of



- (A) 6, 6 -dibromoheptan-2-ol (B) 2, 2-dibromoheptan-2-ol  
 (C) 6, 6-dibromoheptan-2-al (D) 2, 6-dibromohydroxy heptane

22. Which of the following statements is not correct?

- (A) All metals are solid at room temperature.  
 (B) All metals are good conductors of heat and electricity.  
 (C) All metals form basic oxides.  
 (D) All metals possess lustre when freshly prepared.

Space for rough work

23. The metal that reacts with cold water is  
(A) Mercury                      (B) Sodium                      (C) Zinc                      (D) Tungsten
24. Brass is a mixture of  
(A) Copper and zinc  
(B) Copper and tin  
(C) Copper, nickel and zinc  
(D) Aluminium, copper and traces of Mg and Mn
25. Among  $\text{Al}_2\text{O}_3$ ,  $\text{SiO}_2$ ,  $\text{P}_2\text{O}_3$  and  $\text{SO}_2$  the correct order of acid strength is  
(A)  $\text{SO}_2 < \text{P}_2\text{O}_3 < \text{SiO}_2 < \text{Al}_2\text{O}_3$                       (B)  $\text{Al}_2\text{O}_3 < \text{SiO}_2 < \text{P}_2\text{O}_3 < \text{SO}_2$   
(C)  $\text{Al}_2\text{O}_3 < \text{SiO}_2 < \text{SO}_2 < \text{P}_2\text{O}_3$                       (D)  $\text{SiO}_2 < \text{SO}_2 < \text{Al}_2\text{O}_3 < \text{P}_2\text{O}_3$
26. The correct order of electron affinity among the following is  
(A)  $\text{F} > \text{Cl} > \text{Br}$                       (B)  $\text{Br} > \text{Cl} > \text{F}$                       (C)  $\text{Cl} > \text{F} > \text{Br}$                       (D)  $\text{F} > \text{Br} > \text{Cl}$
27. Alkali metals in each period have  
(A) Smallest size                      (B) Lowest I.E.  
(C) Highest I.E.                      (D) Highest electronegativity
28. In the balanced equation  
$$\text{Cu} + x\text{HNO}_3 \rightarrow \text{Cu}(\text{NO}_3)_2 + y\text{NO}_2 + 2\text{H}_2\text{O}$$
The values of x and y are  
(A) 3 and 5                      (B) 8 and 6                      (C) 4 and 2                      (D) 7 and 1
29. Copper on exposure to air reacts with moisture and  $\text{CO}_2$  to develop a green layer which is chemically  
(A) basic copper carbonate                      (B) copper sulphate  
(C) copper carbonate                      (D) copper nitrate

---

Space for rough work

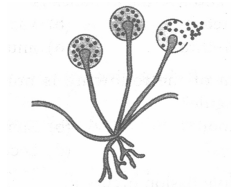
30. In the reaction  $\text{PCl}_3 + \text{Cl}_2 \rightarrow \text{PCl}_5$
- (A)  $\text{PCl}_3$  is acting as reductant
  - (B)  $\text{Cl}_2$  is acting as reductant
  - (C) both  $\text{PCl}_3$  and  $\text{Cl}_2$  are acting as reductant
  - (D) both  $\text{PCl}_3$  and  $\text{Cl}_2$  are acting as oxidant.

### PART-C : BIOLOGY

31. The internal (cellular) energy reserve in autotrophs is :
- (A) Glycogen
  - (B) Protein
  - (C) Starch
  - (D) Fatty acid.
32. Normal blood pressure range is
- (A) 120/80
  - (B) 100/60
  - (C) 140/90
  - (D) 90/50
33. Movement of food through the lower region of oesophagus is due to
- (A) Lubrication by saliva
  - (B) Peristalsis
  - (C) Gravitational pull
  - (D) All of these.
34. Heart beat originates from :-
- (A) Left atrium
  - (B) Right ventricle
  - (C) Pacemaker
  - (D) Cardiac muscles
35. The white matter in a bird's dropping is :-
- (A) Calcium carbonate
  - (B) Calcium sulphate
  - (C) Uric acid
  - (D) Urea

Space for rough work

36. The directional movement or orientation of a plant part in response to light is termed
- (A) Chemotropism (B) Phototropism  
(C) Thigmotaxis (D) Photoperiodism.
37. Which is the correct sequence of the components of a reflex arc?
- (A) Receptors → muscles → sensory neuron → motor neuron → spinal cord  
(B) Receptors → motor neuron → spinal cord → sensory neuron → muscles  
(C) Receptors → spinal cord → sensory neuron → motor neuron → muscles  
(D) Receptors → sensory neuron → spinal cord → motor neuron → muscles
38. Cerebral hemispheres are the centres of
- (A) Posture and equilibrium (B) Reflex actions  
(C) Thinking and memory (D) All of these
39. Where does fertilization occur in human females?
- (A) Uterus (B) Cervix (C) Oviduct (D) Vagina
40. Identify the following organism.



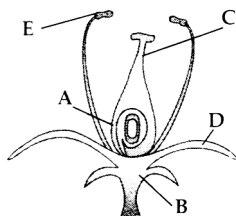
- (A) Rhizobium (B) Rhizopus (C) Rhizoid (D) Mushroom

---

Space for rough work



41. Match the labelled parts of the given figure with the correct option.



- | A         | B        | C        | D        | E        |
|-----------|----------|----------|----------|----------|
| (A) Ovary | Thalamus | Filament | Sepal    | Anther   |
| (B) Ovary | Thalamus | Style    | Sepal    | Anther   |
| (C) Ovule | Sepal    | Style    | Thalamus | Filament |
| (D) Ovule | Sepal    | Style    | Thalamus | Stamen   |
42. Oral contraceptives prevent
- (A) Fertilization (B) Ovulation  
(C) Entrance of sperms in vagina (D) All of these
43. An organism with two unlike genes for a trait is called
- (A) Homozygous (B) Heterozygous (C) Wild variety (D) Dominant variety.
44. Mendel conducted his famous breeding experiments by working on
- (A) Drosophila (B) Pisum sativum (C) Escherichia coli (D) all of these.
45. The crossing of a homozygous tall plant with a dwarf would yield plants in the ratio of
- (A) Two tall and two dwarf  
(B) One homozygous tall, one homozygous dwarf and two heterozygous tall  
(C) All homozygous dwarf  
(D) All heterozygous tall.

Space for rough work

## PART-D : MENTAL ABILITY

Find the missing number :

78	?	97
43	67	58
35	13	39

46.

- (A) 84                      (B) 80                      (C) 54                      (D) 48

47.

$$3 \begin{array}{c} 4 \\ \circlearrowleft 6 \\ 5 \end{array} 6 \quad 4 \begin{array}{c} 5 \\ \circlearrowleft 7 \\ 3 \end{array} 5 \quad 3 \begin{array}{c} 6 \\ \circlearrowleft ? \\ 4 \end{array} 7$$

- (A) 4                      (B) 9                      (C) 6                      (D) 8

48.

$$4 \begin{array}{c} 8 \\ \circlearrowleft 5 \\ 7 \end{array} 6 \quad 18 \begin{array}{c} 12 \\ \circlearrowleft 7 \\ 10 \end{array} 9 \quad 13 \begin{array}{c} 11 \\ \circlearrowleft 6 \\ 7 \end{array} ?$$

- (A) 9                      (B) 8                      (C) 6                      (D) 5

49. If in a code language **MENTAL** is coded as 417253, then how is **TEN & ANT** coded in that language ?

- (A) 572,271              (B) 217,527              (C) 572, 217              (D) 217, 572

50. If **REASON** is coded as 5 and **BELIEVED** as 7, what is the code number for **GOVERNMENT**?

- (A) 6                      (B) 8                      (C) 9                      (D) 10

51. If **E = 5 & SAFE = 31**, then **PINK = ?**

- (A) 41                      (B) 40                      (C) 50                      (D) 65

Space for rough work

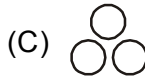
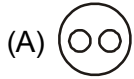
52. Amit faces towards North. Turning to his right he walks 25 metre. He then turns to his left and walks 30 metre. Then moves 25 metre to his right. He then turns to his right again and walks 55 metre. Finally, he turns to the right and moves 40 metre. In which direction is he now from his starting point ?
- (A) South-West      (B) South      (C) North-West      (D) South-East
53. Kishen walks 10 km towards North. From there, he walks 6 km towards South. Then, he walks 3 km towards East. How far and in which direction is he with reference to his starting point ?
- (A) 5 km, North      (B) 5 km, North-East      (C) 7 km, East      (D) 7 km, West
54. A man was facing East. He took Three paces forward, turned right, walked another two paces and then turned right again, took three paces and turned about. Which direction was he last facing ?
- (A) East      (B) North      (C) South      (D) None of these
55. Pointing to a photograph, a man says to his friend, "She is the grand-daughter of the elder brother of my father". How is the girl in the photograph related to the man ?
- (A) Niece      (B) Sister      (C) Aunt      (D) Sister-in-law
56. Pointing to a girl in the photograph. Amar said, "Her mother's brother is the only son of my mother's father". How is the girl's mother related to Amar ?
- (A) Mother      (B) Sister      (C) Sister-in-law      (D) Grandmother
57. T is the son of P. S. is the son of Q. T is married to R. R is Q's daughter. How is S related to T ?
- (A) Brother      (B) Uncle      (C) Father-in-law      (D) Brother-in-law

---

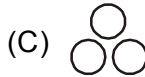
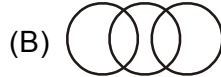
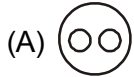
Space for rough work

**DIRECTIONS : (58 to 60) Each of these questions given below contains three group of things. You are to choose from the following four numbered diagrams, a diagram that depicts the correct relationship among the three groups of thing in each question.**

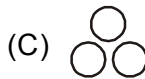
58. Moon, Earth, Universe



59. India, Pakistan, Asia



60. Batsman, Cricket, Stick




---

Space for rough work

# ANSWER KEYS

## SAMPLE TEST PAPER

(For Students Going to Class 11<sup>TH</sup> IN 2022)

STREAM : MEDICAL | COURSE OFFERED : MEDICAL GROUND ZERO

### PHYSICS

- |         |         |         |         |
|---------|---------|---------|---------|
| 1. (A)  | 2. (A)  | 3. (D)  | 4. (B)  |
| 5. (C)  | 6. (C)  | 7. (A)  | 8. (D)  |
| 9. (D)  | 10. (B) | 11. (D) | 12. (C) |
| 13. (A) | 14. (A) | 15. (B) |         |

### CHEMISTRY

- |         |         |         |         |
|---------|---------|---------|---------|
| 16. (C) | 17. (D) | 18. (D) | 19. (C) |
| 20. (D) | 21. (A) | 22. (A) | 23. (B) |
| 24. (A) | 25. (B) | 26. (C) | 27. (B) |
| 28. (C) | 29. (A) | 30. (A) |         |

### BIOLOGY

- |         |         |         |         |
|---------|---------|---------|---------|
| 31. (C) | 32. (A) | 33. (B) | 34. (C) |
| 35. (C) | 36. (B) | 37. (D) | 38. (C) |
| 39. (C) | 40. (B) | 41. (B) | 42. (B) |
| 43. (B) | 44. (B) | 45. (D) |         |

### MENTAL ABILITY

- |         |         |         |         |
|---------|---------|---------|---------|
| 46. (B) | 47. (C) | 48. (D) | 49. (D) |
| 50. (C) | 51. (C) | 52. (D) | 53. (B) |
| 54. (A) | 55. (A) | 56. (A) | 57. (D) |
| 58. (A) | 59. (A) | 60. (D) |         |